

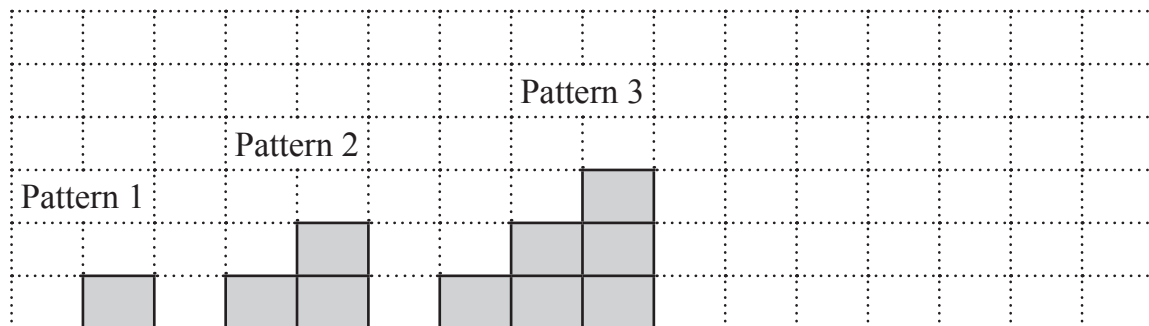
1 Part of a sequence of numbers is shown.

... 25, 36, 49, 64, 81, ...

(a) What is the name of the sequence?

Answer _____ [1]

(b) Here is a pattern of bricks representing the first three triangular numbers.



(i) Draw pattern 4 on the grid above. [1]

(ii) Complete the table for the number of bricks in the pattern.

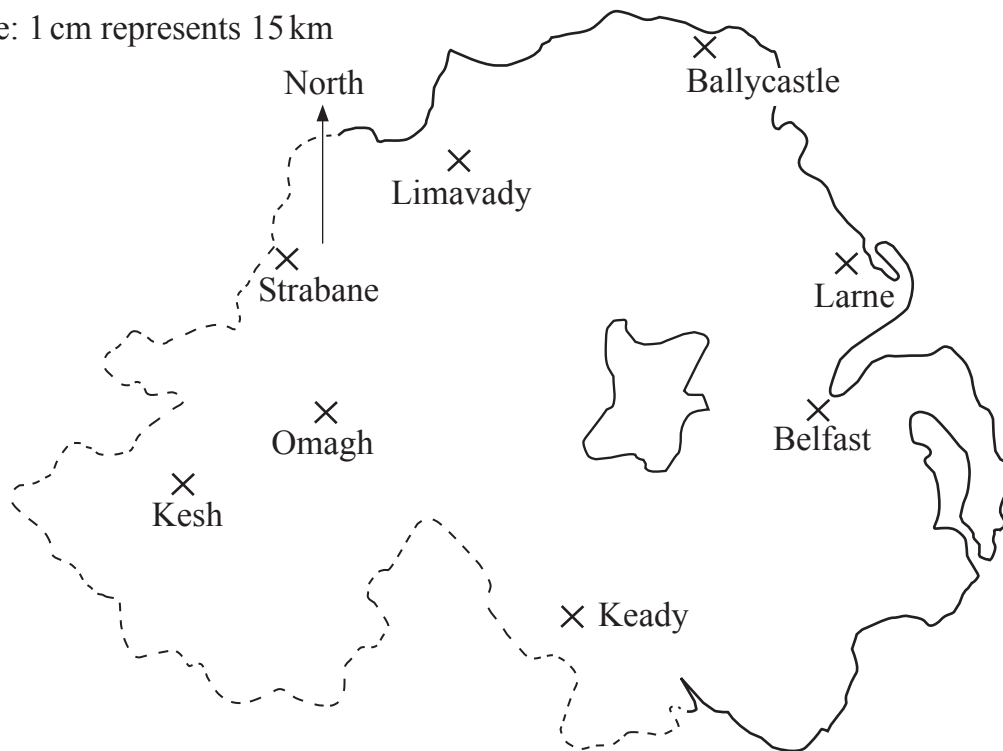
Pattern 1	Pattern 2	Pattern 3	Pattern 4
1	3		

[1]



3 Some places in Northern Ireland are shown on the map.

Scale: 1 cm represents 15 km



(a) Which place shown on the map is furthest west?

Answer _____ [1]

(b) Which place shown on the map is north east of Omagh?

Answer _____ [1]

(c) A bird flies directly from Keady to Larne.
What is the actual distance the bird flies?

Answer _____ km [2]

(d) Ballymoney is 30 km due east of Limavady.
Mark Ballymoney on the map with an X.

[2]

[Turn over



4 Mel has some T-shirts.

8 are white, 5 are red, 2 are yellow and 1 is grey.

She takes one at random.

(a) Circle the chance that it is red.

impossible unlikely evens likely certain [1]

(b) Circle the chance that it is white.

impossible unlikely evens likely certain [1]

(c) Circle the chance that it is green.

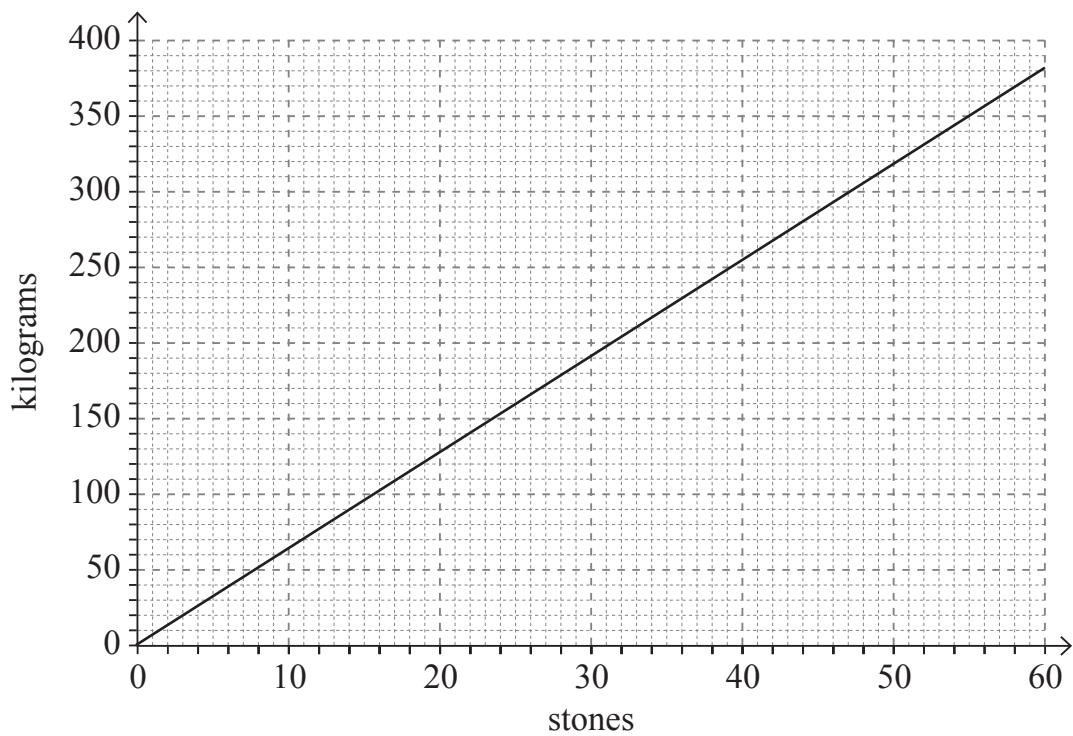
impossible unlikely evens likely certain [1]

5 Change 40 miles into kilometres.

Answer _____ km [2]



6 You can use this graph to change between stones and kilograms.



(a) Use the graph to change 30 stones into kilograms.

Answer _____ kilograms [1]

(b) Nick orders 900 kilograms of topsoil.

Use the graph to change 900 kilograms into stones.

Show clearly how you used the graph.

Answer _____ stones [2]

[Turn over



9 Alan wants to take his family on a 13-night trip to Florida.

He must pay for four adults and three children.

His children will be charged at half the adult price.

He had planned to go at Christmas but now will go in April.

© Getty Images

How much extra will he have to pay?

Show all working.

FLORIDA HOLIDAY PRICES

Departs	7th Sept to 15th Nov	16th Nov to 17th Jan	18th Jan to 13th Mar	14th Mar to 5th June	6th June to 30th June
13 nights	1699	1899	2049	2149	1899

Prices shown are for adults in £s per person.

Answer £ _____ [5]

[Turn over



10 Here are the first three terms of a number sequence.

90 84 78

(a) Write down the 8th term in this number sequence.

Answer _____ [1]

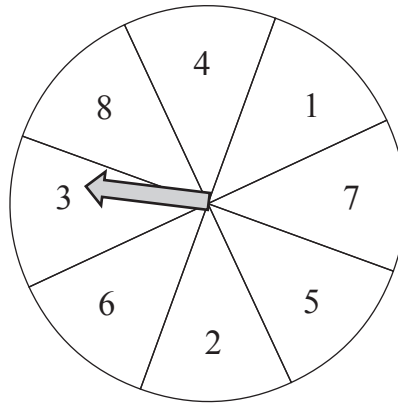
(b) Daniel says that 5 cannot be a term in this number sequence.

Is Daniel correct? Explain why.

Answer _____ [1]



11



A spinner consists of a circular wheel which is divided into eight sectors numbered 1 to 8 as in the diagram.

When spun, the arrow will point to one of the sectors.

(a) What is meant if the spinner is described as a **fair** spinner?

Answer _____
_____ [1]

(b) The spinner is **not** fair.

The probability of the arrow pointing to the sector numbered 7 is 0.15

Work out the probability of the arrow not pointing to the sector numbered 7

Answer _____ [2]


[Turn over



12 There are 648 pupils in a school.

The ratio of boys to girls is 4 : 5

How many girls are in the school?



Answer _____ [2]



13

Instructions for Fizzy Juice

Mix 3 parts Fruit Juice
with
7 parts Lemonade



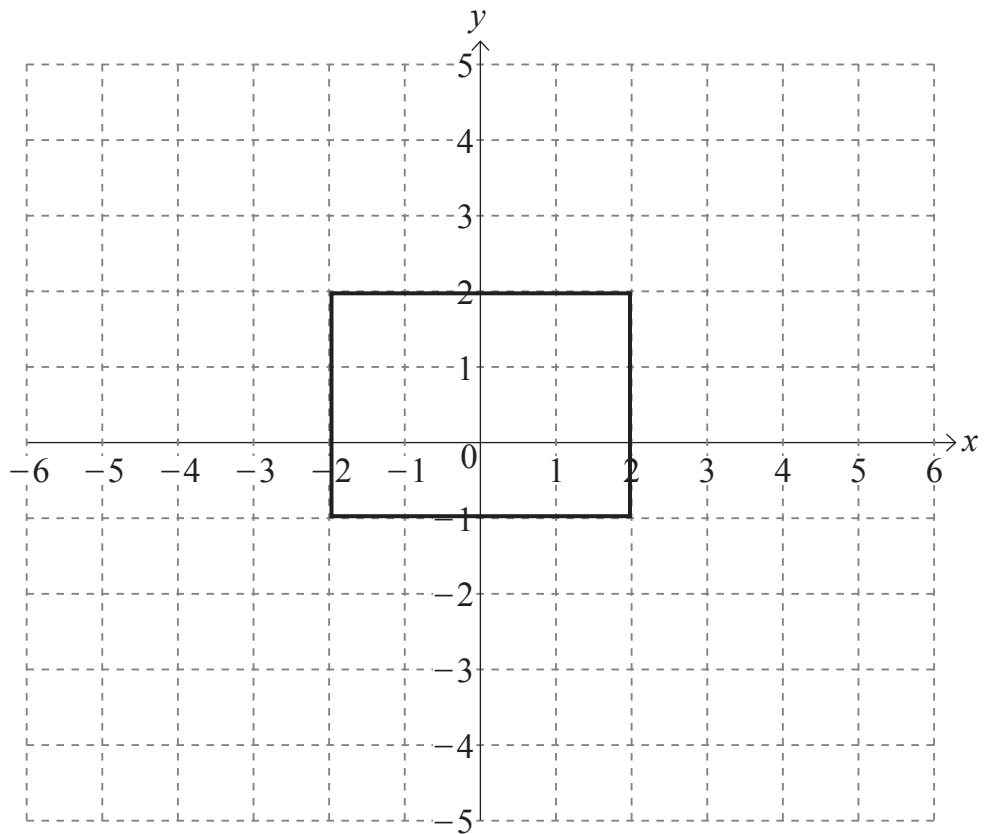
Molly has 600 ml of fruit juice.

She also has 1800 ml of lemonade.

What is the maximum number of litres of fizzy juice she can make?

Answer _____ litres [3]





Enlarge the rectangle shown using a scale factor of 2 and centre of enlargement (0,0)

[3]



15 In America, Dave bought a book for 28 dollars.

The exchange rate was 1 dollar = 81p.

In France, Evie bought a book for 25 euro.

The exchange rate was £1 = 1.09 euro.

Who paid more and how much more?

Answer _____ paid _____ more [4]

THIS IS THE END OF THE QUESTION PAPER



BLANK PAGE
DO NOT WRITE ON THIS PAGE

12510



20GMC5218





BLANK PAGE
DO NOT WRITE ON THIS PAGE

12510



20GMC5219

DO NOT WRITE ON THIS PAGE

For Examiner's use only	
Question Number	Marks
1	
2	
3	
4	
5	
6	
7	
8	
9	
10	
11	
12	
13	
14	
15	

Total Marks	
--------------------	--

Examiner Number

Permission to reproduce all copyright material has been applied for.
In some cases, efforts to contact copyright holders may have been unsuccessful and CCEA will be happy to rectify any omissions of acknowledgement in future if notified.

12510/7



20GMC5220